


TYPICAL EXAMINATION QUESTIONS

V.Ryan © 2000 - 2012

On behalf of The World Association of Technology Teachers

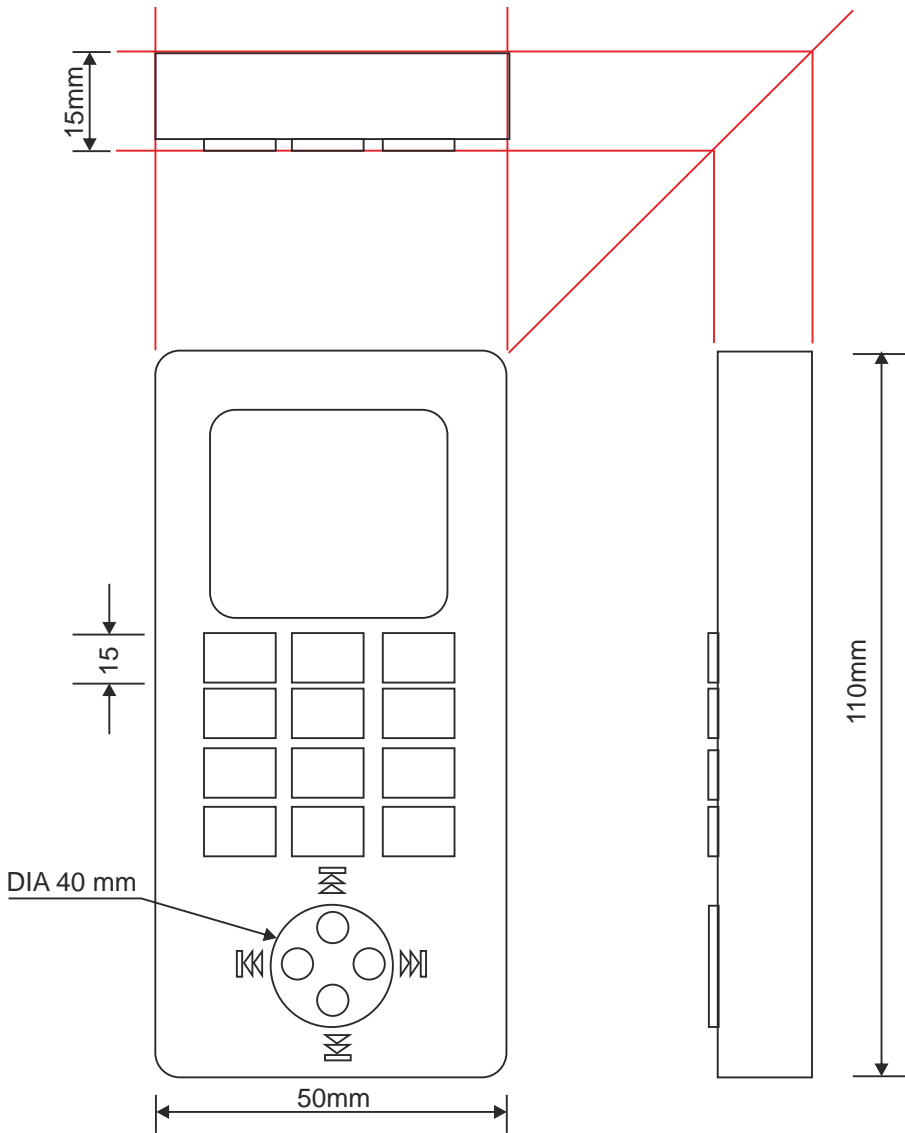
W.A.T.T.



World Association of Technology Teachers

This exercise can be printed and used by teachers and students. It is recommended that you view the website (www.technologystudent.com) before attempting the design sheet .

THESE MATERIALS CAN BE PRINTED AND USED BY TEACHERS AND STUDENTS.
THEY MUST NOT BE EDITED IN ANY WAY OR PLACED ON ANY OTHER MEDIA INCLUDING WEB SITES AND INTRANETS.
NOT FOR COMMERCIAL USE.
THIS WORK IS PROTECTED BY COPYRIGHT LAW.
IT IS ILLEGAL TO DISPLAY THIS WORK ON ANY WEBSITE/MEDIA STORAGE OTHER THAN www.technologystudent.com



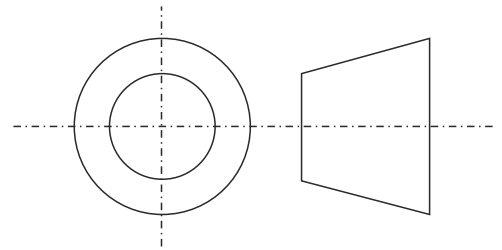
14. The orthographic view of a mobile phone / MP3 player is seen opposite.

Using the details provided by the views of the orthographic projection, complete the isometric drawing seen below. Two basic sides have been drawn for you

Estimate measurements.

Add suitable colour and shade.

Add thick and thin lines to enhance your drawing.



THIRD ANGLE PROJECTION

V.Ryan © 2012 World Association of Technology Teachers

