

BICYCLE GEARS - VELOCITY RATIO

V.Ryan © 2000 - 2010

On behalf of The World Association of Technology Teachers

W.A.T.T.



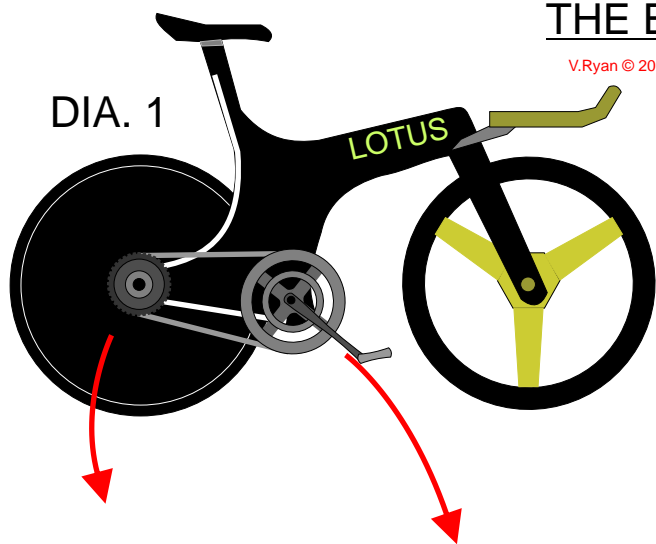
World Association of Technology Teachers

This exercise can be printed and used by teachers and students. It is recommended that you view the website (www.technologystudent.com) before attempting the design sheet .

THESE MATERIALS CAN BE PRINTED AND USED BY TEACHERS AND STUDENTS.
THEY MUST NOT BE EDITED IN ANY WAY OR PLACED ON ANY OTHER MEDIA INCLUDING WEB SITES AND INTRANETS.
NOT FOR COMMERCIAL USE.
THIS WORK IS PROTECTED BY COPYRIGHT LAW.
IT IS ILLEGAL TO DISPLAY THIS WORK ON ANY WEBSITE/MEDIA STORAGE OTHER THAN www.technologystudent.com

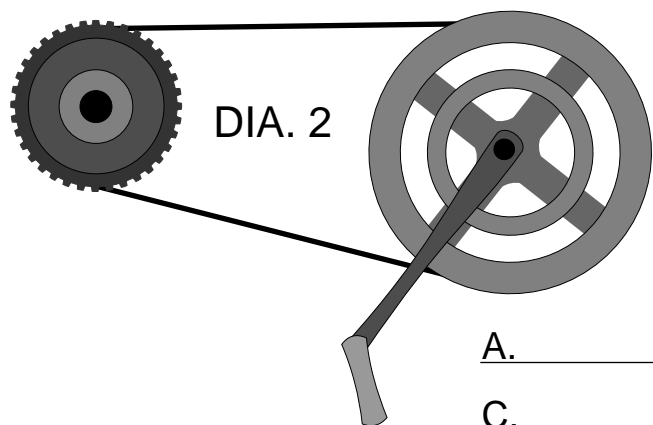
THE BASICS - GEARS

V.Ryan © 2010 World Association of Technology Teachers



1. The racing bicycle seen in DIA. 1 has a set of gears. What advantage does it have over bicycles with one fixed gear?

2. Add the labels printed below to their correct places on DIA. 2.



PEDAL GEAR

SPROCKET

DRIVEN
GEAR WHEEL

DRIVER
GEAR WHEEL

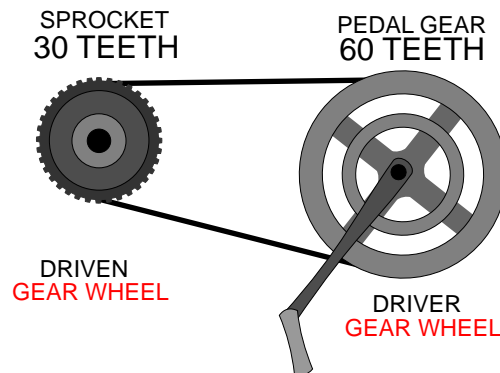
3. Name four other machines that use gears?

A. _____ B. _____
C. _____ D. _____

4. Most people have experienced cycling up a hill. The steeper the hill gets the more difficult it is to pedal. Normally a cyclist changes gears to make it easier. Explain how the gear system on a bicycle makes it easier, although slower to cycle up a hill.

5. What will happen if a cyclist going up a hill changes gear from a larger to a smaller sprocket gear wheel? Will it be easier or harder to pedal?

6. The diagram drawn opposite shows the gear arrangement of a bicycle. If the pedal gear revolves once how many times will the sprocket gear revolve? Complete the formula and calculation below.



$$\frac{\text{NUMBER OF TEETH ON PEDAL GEAR}}{30 \text{ TEETH}} =$$

The gear ratio is : _____ : _____
PEDAL GEAR SPROCKET GEAR