

SECTIONS AND BEAMS

V.Ryan © 2000 - 2009

On behalf of The World Association of Technology Teachers

W.A.T.T.



World Association of Technology Teachers

This exercise can be printed and used by teachers and students. It is recommended that you view the website (www.technologystudent.com) before attempting the design sheet .


THESE MATERIALS CAN BE PRINTED AND USED BY TEACHERS AND STUDENTS.
THEY MUST NOT BE EDITED IN ANY WAY OR PLACED ON ANY OTHER MEDIA INCLUDING WEB SITES AND INTRANETS.
NOT FOR COMMERCIAL USE.
THIS WORK IS PROTECTED BY COPYRIGHT LAW.
IT IS ILLEGAL TO DISPLAY THIS WORK ON ANY WEBSITE/MEDIA STORAGE OTHER THAN www.technologystudent.com

SECTIONS AND BEAMS

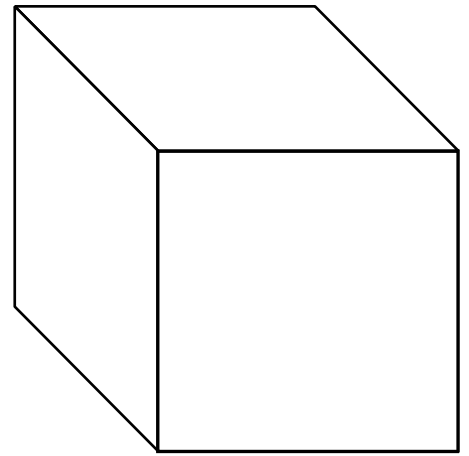
V.Ryan © 2009 World Association of Technology Teachers

1. Complete the diagrams of the various sections shown / named below, by adding the missing lines. All the sections should be completed as 3D sketches / drawings.

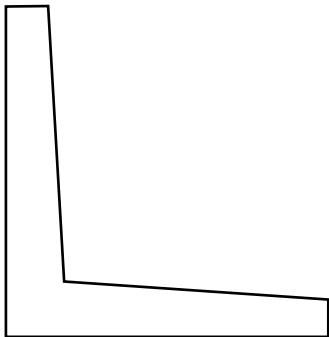
CIRCULAR SECTION



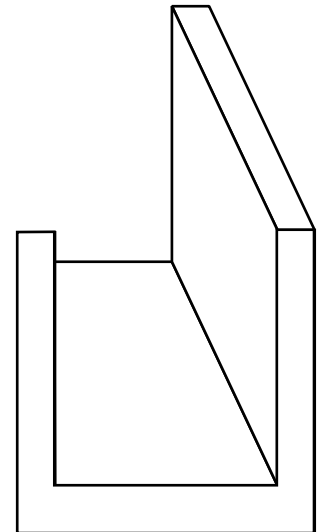
SQUARE SECTION



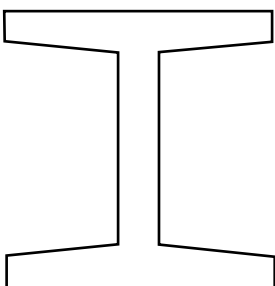
L-SECTION



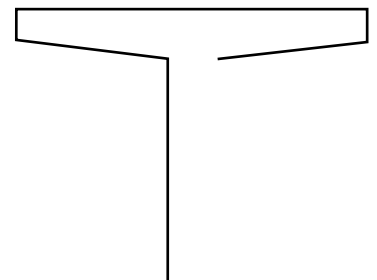
U-SECTION



I-SECTION



T-SECTION




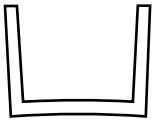
SECTIONS AND BEAMS

V.Ryan © 2009 World Association of Technology Teachers

2. What are the advantages of using steel tube rather than solid section steel, on larger projects?

3. Look carefully at the bicycle shown below. Identify the different sections that have been used during its construction. One section has already been identified for you. Add other sections by drawing them and naming the part.

WHEEL RIM



4. What materials are used to manufacture modern bicycle frames ? Why are these materials used?

MATERIALS: _____

WHY USED: _____

5. Look around the rooms in your home, especially the kitchen and bathroom. Describe the use of tube in these rooms. You may wish to talk about the materials and sections used.
