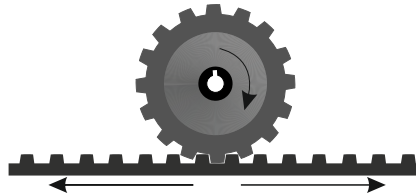

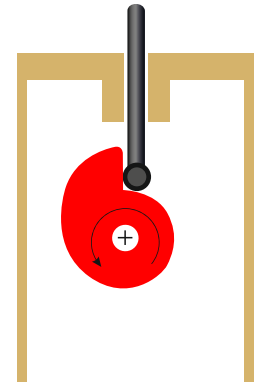
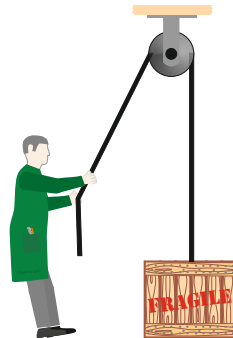

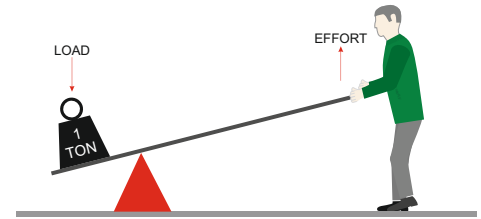
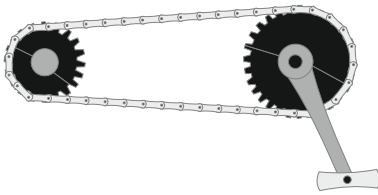


MECHANISMS STARTER

HELPFUL LINK: <https://technologystudent.com/cams/camdex.htm>

A number of mechanisms are drawn below. Write the correct name beneath each one.

- SPUR GEARS SCREW THREAD LINKAGES PULLEY SYSTEM LEVERS
CHAIN AND SPROCKET SYSTEM DROP CAM RACK AND PINION SPRING



Draw one more mechanism in the space opposite, Write the name of the mechanism alongside.

